

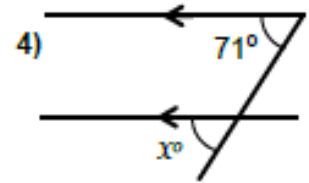
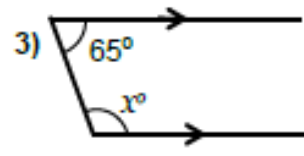
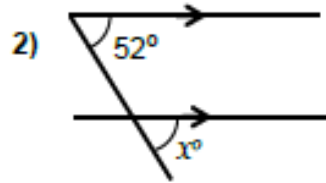
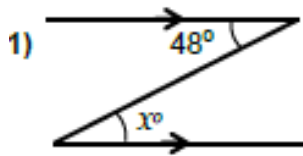
Angles Worksheet 10

With Clues



NOT TO SCALE

Section A: State the missing angle and give a reason for your answer..



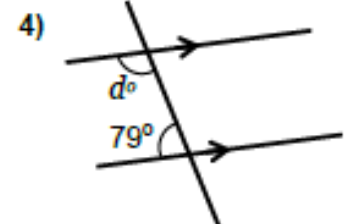
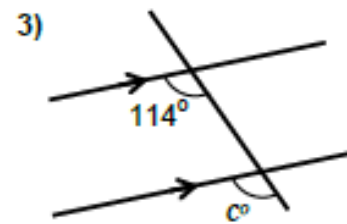
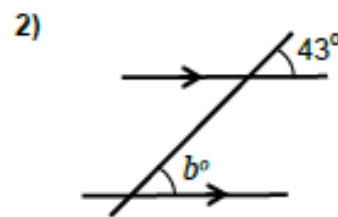
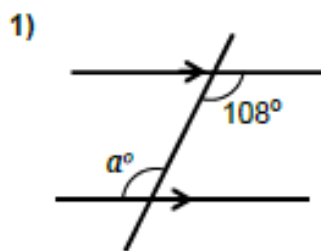
Angle x : _____
Reason: _____

Angle x : _____
Reason: _____

Angle x : _____
Reason: _____

Angle x : _____
Reason: _____

Section B: Calculate the missing angle and give a reason for your answer..

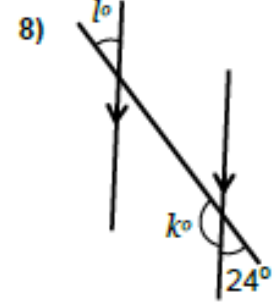
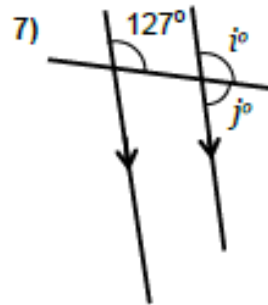
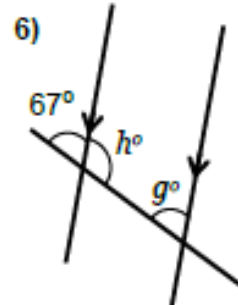
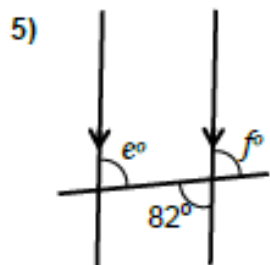


Angle a : _____
Reason: _____

Angle b : _____
Reason: _____

Angle c : _____
Reason: _____

Angle d : _____
Reason: _____



Angle e : _____
Reason: _____

Angle g : _____
Reason: _____

Angle i : _____
Reason: _____

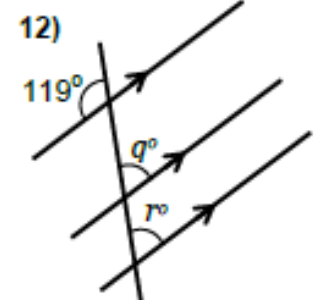
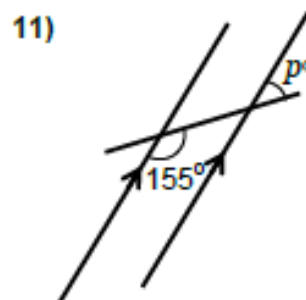
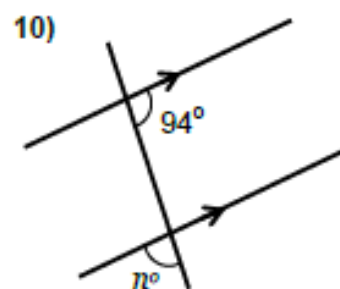
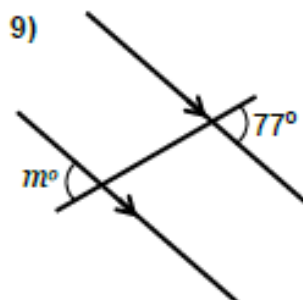
Angle k : _____
Reason: _____

Angle f : _____
Reason: _____

Angle h : _____
Reason: _____

Angle j : _____
Reason: _____

Angle l : _____
Reason: _____



Angle m : _____
Reason: _____

Angle n : _____
Reason: _____

Angle p : _____
Reason: _____

Angle q & r : _____
Reason: _____

£1.00