

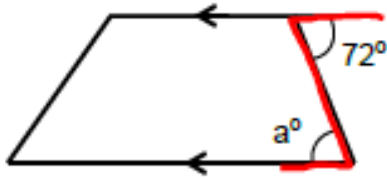
Angles Worksheet 11

With Clues



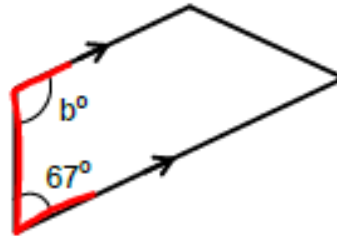
For each question calculate the missing angle and give a reason for your answer.

1)



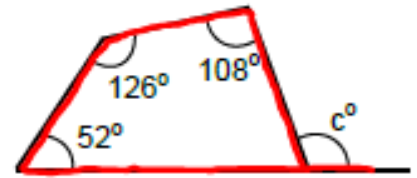
Reason: _____

2)



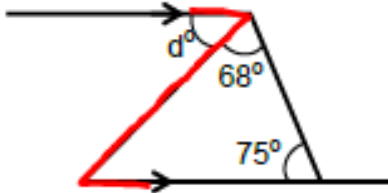
Reason: _____

3)



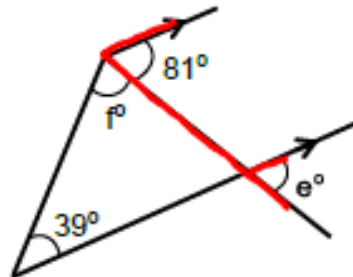
Reason: _____

4)



Reason: _____

5)



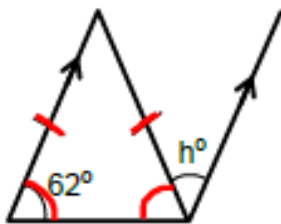
Reason: _____

6)



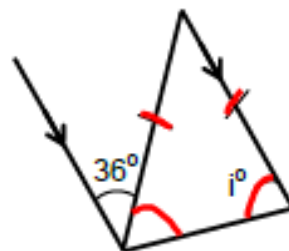
Reason: _____

7)



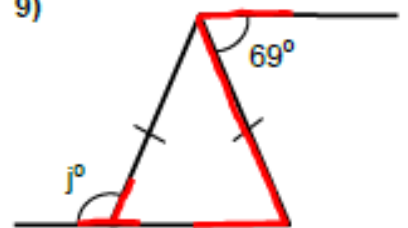
Reason: _____

8)



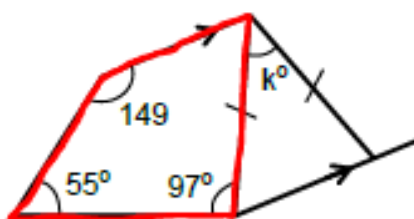
Reason: _____

9)



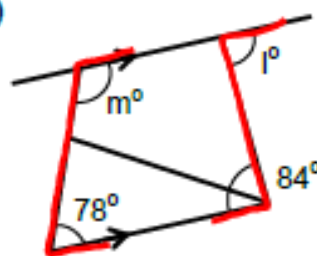
Reason: _____

10)



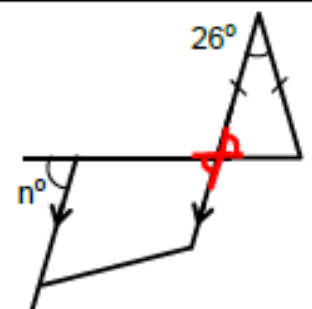
Reason: _____

11)



Reason: _____

12)



Reason: _____

£1.00