
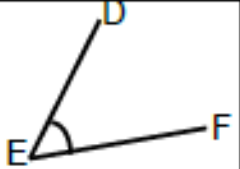
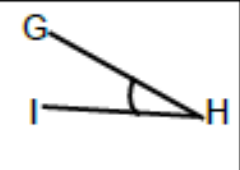
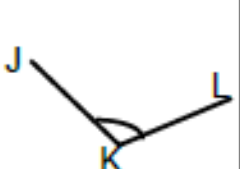
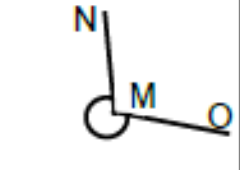
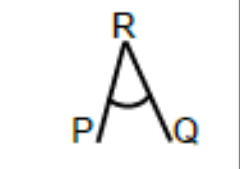
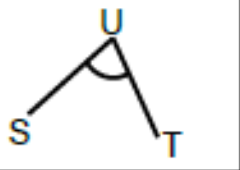
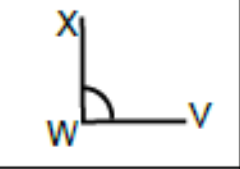
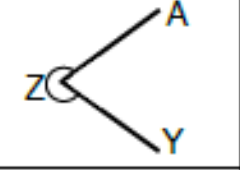
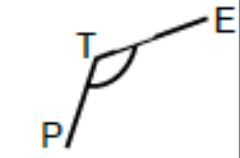


Angles Worksheet 2



Section A

Angle	Estimate	Type	Description
	35°	ACUTE	$\angle ABC$
			
			
			
			
			
			
			
			
			

Angle	Estimate	Type	Description
	70°		$\angle ABC$
	90°		$\angle GTH$
	100°		$\angle JKZ$
	175°		$\angle MWQ$
	190°		$\angle DVB$
	300°		$\angle ASU$
	20°		$\angle GJL$
	350°		$\angle IER$
	15°		$\angle FQO$
	200°		$\angle HTY$

£1.00