

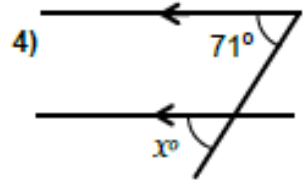
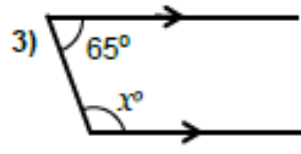
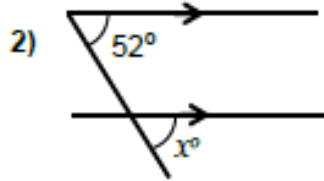
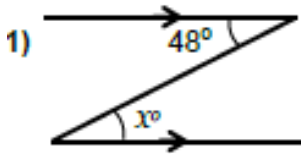
# Angles Worksheet 10

## With Clues



NOT TO SCALE

**Section A:** State the missing angle and give a reason for your answer..



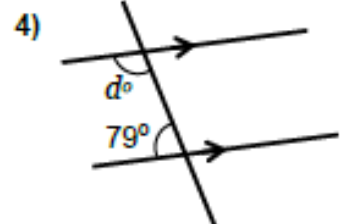
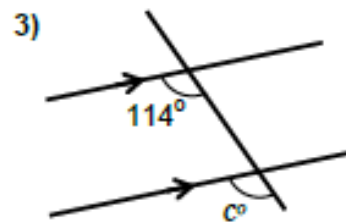
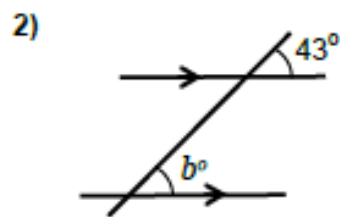
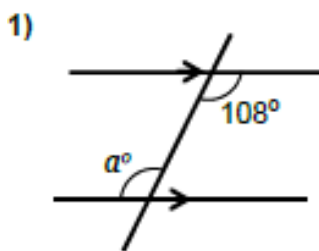
Angle  $x$ : \_\_\_\_\_  
Reason: \_\_\_\_\_

Angle  $x$ : \_\_\_\_\_  
Reason: \_\_\_\_\_

Angle  $x$ : \_\_\_\_\_  
Reason: \_\_\_\_\_

Angle  $x$ : \_\_\_\_\_  
Reason: \_\_\_\_\_

**Section B:** Calculate the missing angle and give a reason for your answer..

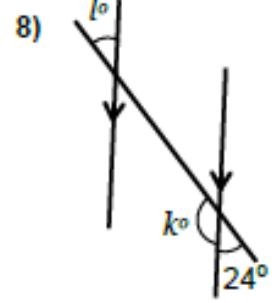
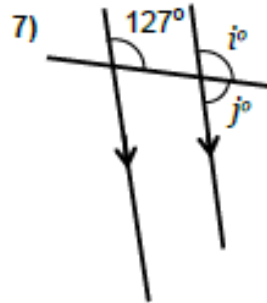
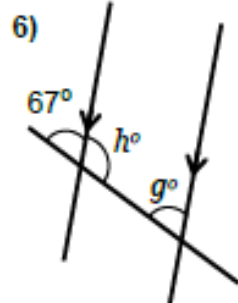
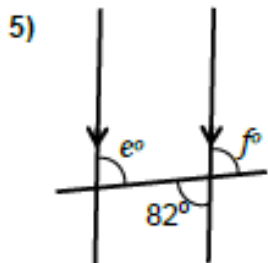


Angle  $a$ : \_\_\_\_\_  
Reason: \_\_\_\_\_

Angle  $b$ : \_\_\_\_\_  
Reason: \_\_\_\_\_

Angle  $c$ : \_\_\_\_\_  
Reason: \_\_\_\_\_

Angle  $d$ : \_\_\_\_\_  
Reason: \_\_\_\_\_

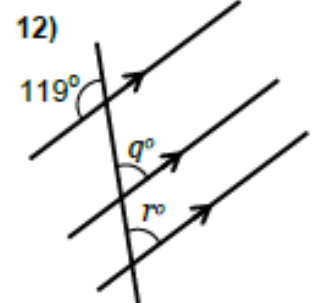
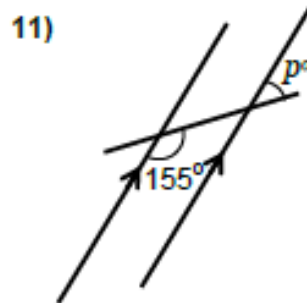
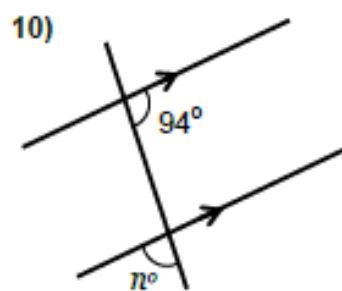
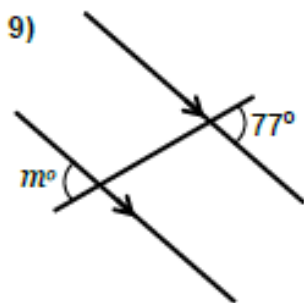


Angle  $e$ : \_\_\_\_\_  
Reason: \_\_\_\_\_  
Angle  $f$ : \_\_\_\_\_  
Reason: \_\_\_\_\_

Angle  $g$ : \_\_\_\_\_  
Reason: \_\_\_\_\_  
Angle  $h$ : \_\_\_\_\_  
Reason: \_\_\_\_\_

Angle  $i$ : \_\_\_\_\_  
Reason: \_\_\_\_\_  
Angle  $j$ : \_\_\_\_\_  
Reason: \_\_\_\_\_

Angle  $k$ : \_\_\_\_\_  
Reason: \_\_\_\_\_  
Angle  $l$ : \_\_\_\_\_  
Reason: \_\_\_\_\_



Angle  $m$ : \_\_\_\_\_  
Reason: \_\_\_\_\_

Angle  $n$ : \_\_\_\_\_  
Reason: \_\_\_\_\_

Angle  $p$ : \_\_\_\_\_  
Reason: \_\_\_\_\_

Angle  $q$  &  $r$ : \_\_\_\_\_  
Reason: \_\_\_\_\_

£1.00